

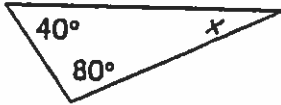
Name _____

Date _____

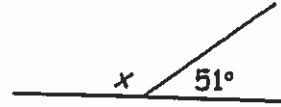
ANGLE RELATIONSHIPS

Find, with reasons, the measure of each unknown.

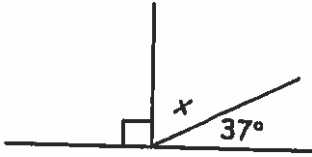
1.



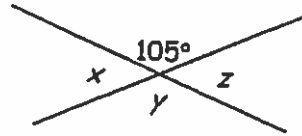
2.



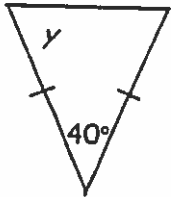
3.



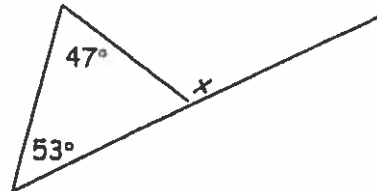
4.



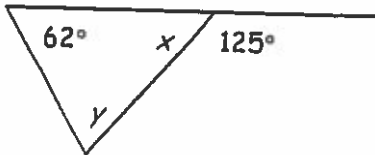
5.



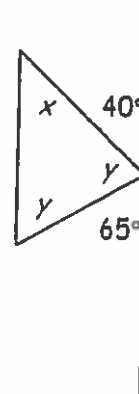
6.



7.



8.



Size of Angle

